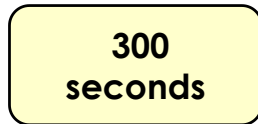
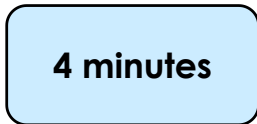
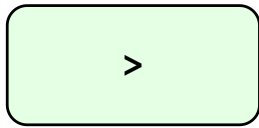


## Converting Units of Time

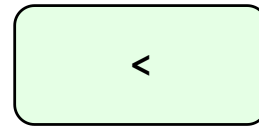
1a. Arrange the cards into a correct number sentence.



PS

## Converting Units of Time

1b. Arrange the cards into a correct number sentence.



PS

2a. Jack says,



I'm going to a concert in 70 days!

Mia says,



That's only 7 weeks away!

Is Mia correct?  
Explain your reasoning.



R

2b. Logan says,



I finished the race in 3 minutes.

Zairah says,



Wow! That's only 180 seconds!

Is Zairah correct?  
Explain your reasoning.



R

3a. Some children at Oakland Primary School are celebrating their birthday.

Cameron is 108 months old.

Kayleigh is 8 years old.

Lee is 84 months old.

Who is the youngest?



PS

3b. Three friends take a nap before they go to a party.

Evie sleeps for 120 minutes.

Raheem sleeps for 3 hours.

Leticia sleeps for 240 minutes.

Who has the longest nap?



PS

## Converting Units of Time

4a. Arrange the cards into a correct number sentence. Find all the possibilities using both symbols.

>

3,780 seconds

3,900 seconds

<

72 minutes



PS

## Converting Units of Time

4b. Arrange the cards into a correct number sentence. Find all the possibilities using both symbols.

=

66 months

55 months

<

5 years 6 months



PS

5a. Kelsey says,



It's my birthday in 13 weeks!

Joe says,



Only 80 days to go!

Is Joe correct?  
Explain your reasoning.



R

5b. Lily says,



I'm going to the beach in 35 hours!

Ravi says,



3 days and 5 hours to go!

Is Ravi correct?  
Explain your reasoning.



R

6a. Class 5 complete their Ancient Egyptians craft project.

Alfie makes a canopic jar in 2 hours 30 minutes.

Chloe makes a paper scroll in 115 minutes.

Lucy makes a pyramid in 2 hours 40 minutes.

Who makes their craft the quickest?



PS

6b. Three children compete in a race.

Ella finishes in 4 minutes 8 seconds.

Harry finishes in 252 seconds.

Aamina finishes in 3 minutes 90 seconds.

Who finishes the race last?



PS

## Converting Units of Time

7a. Arrange the cards into a correct number sentence. Find all the possibilities using 3 symbols.

<

1.75 hours

9,000 seconds

>

=

2 hours

105 minutes



PS

## Converting Units of Time

7b. Arrange the cards into a correct number sentence. Find all the possibilities using 3 symbols.

=

168 hours

1,440 minutes

<

>

8 days

192 hours



PS

8a. Mo says,



I'll be 16 in 4 years.

Ellie says,

That's 208 weeks away!



Is Ellie correct?  
Explain your reasoning.



R

8b. Maisie says,



The test starts in 3 hours!

Oscar says,

That's 10,800 more seconds yet!



Is Oscar correct?  
Explain your reasoning.



R

9a. Some children are going away on holiday this summer.

Hanshika is going to Spain for 3 weeks.  
James is going to Turkey for 26 days.  
Ellis is going to Florida for 240 hours.  
Izzy is going to France for 2.5 weeks.

Who is going on the shortest holiday?



PS

9b. Four athletes are training for a world championship tournament.

Shannon has trained for 68 months.  
Jaiden has trained for 4.75 years.  
Lexi has trained for 156 weeks.  
Will has trained for 5.25 years.

Who has trained for the shortest time?



PS