




1

1a. Which two numbers add together to make the answer 3,150?

A  B 

C 

★

PS

2a. Louise is adding two 4-digit numbers together.

Th	H	T	O

What digit could be in the ones column so that an exchange takes place?

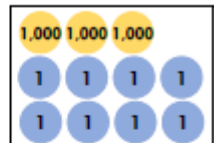
★

PS

2

1a. Match the calculation to the correct answer.

	2	0	3	5
+	1	0	7	3
<hr/>				
<hr/>				

A 

B Three thousand and eighteen

C 3,108

★

VF

2a. What number is missing from the calculation?

	5	4	3	<input type="text"/>
+	1	5	5	1
<hr/>				
	6	9	9	0
<hr/>				
			1	

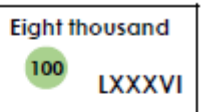
★

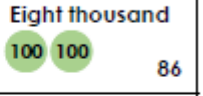
VF

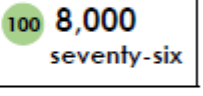
3

1a. Match the calculation to the correct answer.

6,961 add one thousand, two hundred and twenty-five

A  Eight thousand LXXXVI

B  Eight thousand 86

C  8,000 seventy-six

★

VF

2a. What number is missing from the calculation?

9,  67 + 381 = 9948

★

VF